

Rozlišení 2/4 a 3/4 taktu

Poznej 2/4 a 3/4 takt
a písmena zapiš na
příslušný řádek.


Ž



K




R



Í



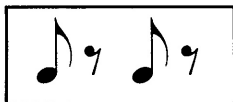
Ž



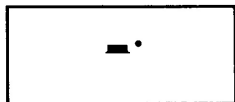
Y



A



Š




L



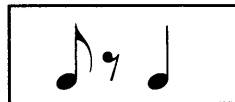
P



Í



Í



N



N



$\frac{2}{4}$

$\frac{3}{4}$